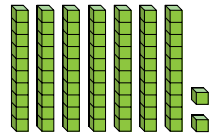


Homework & Practice 9-3

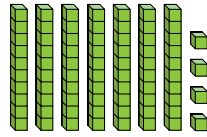
Compare Numbers

Another Look! You can compare numbers to decide if one number is greater than or less than another number.



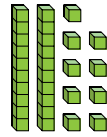
72

is greater than



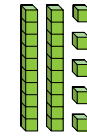
74

is less than



29

is greater than



25

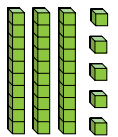
is less than

HOME ACTIVITY Give your child 2 two-digit numbers. Have him or her finish one of these sentences: ____ is greater than ____ or ____ is less than _____. If needed, have your child draw pictures to solve. Consider using numbers where the tens digit or ones digit is the same. This allows him or her to compare only the tens or ones digit to determine which is greater or less.



Write a number to match each model. Then circle **is greater than** or **is less than**.

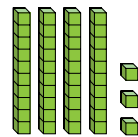
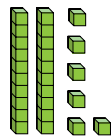
1.



_____ is greater than _____.

_____ is less than _____.

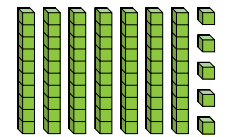
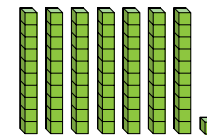
2.



_____ is greater than _____.

_____ is less than _____.

3.



_____ is greater than _____.

_____ is less than _____.

Solve each problem below. Then complete each sentence.

4. Ty counts 29 fish at the zoo.
He counts 22 birds at the zoo.



Did Ty count more birds or more fish?

He counted more _____.

_____ is greater than _____.

5. Kay has 18 yams.
She has 21 pears.



Does Kay have more yams or more pears?

She has more _____.

_____ is less than _____.

6. **Higher Order Thinking** Adam writes a number. The number is greater than 50 and less than 54. What numbers could Adam have written? Explain.

7. **Assessment** Matt has more than 41 marbles and less than 43 marbles. Maya has more than 47 marbles and less than 49 marbles. Draw lines to each statement to make it true.

Matt's marbles 40

Maya's marbles 42

48

50

Matt has _____ more
marbles than Maya. fewer